

ESCOLA: _____

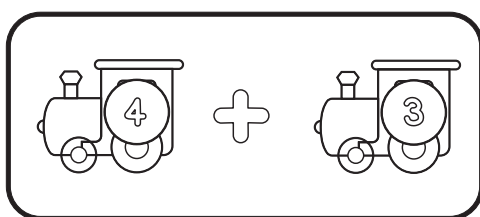
NOME: _____

PROFESSOR: _____ DATA: ___/___/___



CONTANDO DE 10 EM 10

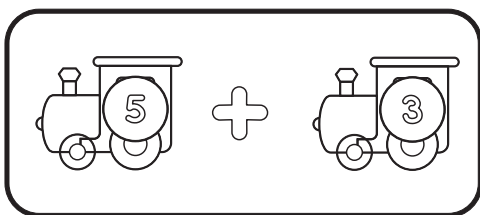
1 - Resolva as adições. Depois, ligue cada uma ao seu resultado.



•

•


8



•

•


15



•

•


13



•

•

7



•

•

6